

CLASS II

TERM II
2023-2024

APPLIED ENGLISH

Index

CONTENTS	Page No.
1. Our Neighbourhood	2 - 5
2. Festivals	6 - 9
3. Locating a Place	10 - 12
4. Means of Transport	13 - 15
5. Seasons and Clothing	16 - 18
6. How our body works	19 - 21
7. Natural and Human - Made Things	22 - 23
8. Changes Around us	24 - 26
9. Our Earth	27 - 30
10. A clean world	31 - 33
11. Our Nation	36

Ch. - 1**Our Neighbourhood****A) Choose the correct option.**

1. Where do we go when we are ill ?

 Bank Hospital Market School

2. Where do you study ?

 School Bank Post office Market

3. Where do we deposit money ?

 Hospital Police Station Bank Mall

4. Who works in a school ?

 Greengrocer Teacher Florist Postman
B) Match the name with the correct answer.


1. School _____

2. Bank _____

3. Hospital _____

4. Market _____

5. Post office _____

**C) Fill in the blanks with the help of given words.**

(hospital, police, guard, envelopes)

1. We see _____ at the school gate.

2. The _____ helps us to live a safe life.

3. We buy _____ from the post office.

4. The doctor examines us at _____.

Ch. - 1

Our Neighbourhood



A) Match the following.

- | | |
|-------------------|--------------------------------------|
| 1. Post office | Safety of money and valuables |
| 2. Bank | housing of fire |
| 3. Hospital | security of life and property |
| 4. Police station | treatment of patients |
| 5. Fire station | delivery of letters and money orders |

B) Write (T) for True and (F) for False statements.

- | | |
|---|--------------------------|
| 1. Police put off fire. | <input type="checkbox"/> |
| 2. Doctors teach the students. | <input type="checkbox"/> |
| 3. We deposit our money in the bank. | <input type="checkbox"/> |
| 4. Post Office sells envelopes, stamps and postcards. | <input type="checkbox"/> |
| 5. We need money to buy things. | <input type="checkbox"/> |

C) Name the professions associated with following neighbourhood services.

- | | |
|-----------------------|-------------------|
| 1. Fire Station | 2. Hospital |
| 3. School | 4. Bank |

Ch. - 1

Our Neighbourhood

Q. A Give one word for the following :-

1. A place where we keep our expensive items like jewellery.

2. Buildings close to our house that can be seen clearly from a distance and that will help you to know where you are

3. People who board a bus for travelling from one place to another.

4. Organizations that sell medicines.

5. People whose job is to put out fires.

Q. B Match the following

A

1. Bank _____
2. Police Station _____
3. Chemist shop _____
4. Post Office _____

B

- Send Letters
- sell medicines
- deposit money & gold
- maintain law and order.

Q.C Who are these people ?

1. A person who sings. _____
2. A person who acts in films and serials. _____
3. A person who cooks food in restaurant _____
4. A person who sells medicines. _____
5. A person who goes into the space _____

Ch. - 1**Our Neighbourhood****Answer the following Questions**

Q 1. How do you send letters to your relatives ?

Ans. _____

Q 2. Why do we need a post office ?

Ans. _____

Q 3. What is a neighbourhood ?

Ans. _____

Q 4. What do we use an ATM for ?

Ans. _____

Q 5. Where do people go to buy medicines ?

Ans. _____

Q 6 How does the police help us ?

Ans. _____

Remark _____ **T. Sign.**

Ch. - 2

Festivals

A) Choose the correct option.

1. is festival of colours.

- Diwali Holi Bihu Pongal

2. The festival of victory of good over evil is

- Diwali Dussehra Holi Christmas

3. is prepared on Eid-ul-Fitr.

- Sewain Khir Gujiya Kesariya rice

4. Bihu is celebrated in

- Punjab Delhi Tamilnadu Assam

5. Christmas is celebrated on

- 15 December 20 December 25 December 31 December

B) Name the festival of

lights - victory over evil.....

brother and sisters - snake boat race

C) See the picture and match them with the names of festivals associated with them.

1.



Diwali

2.



Holi

3.



Eid

4.



Christmas

Ch. - 2 Festivals

A) Name the national festivals that we celebrate on the following dates.

- 1. 26th January
- 2. 15th August
- 3. 2nd October



B) Match the following.

- | | |
|--------------|----------|
| 1. Sewaiyan | Diwali |
| 2. Langar | Holi |
| 3. Pichkaris | Dussehra |
| 4. Crackers | Eid |
| 5. Ramlila | Guruparv |



C) Colour and decorate the Christmas tree. Write five lines describing the festival of Christmas.

- 1.
.....
- 2.
.....
- 3.
.....
- 4.
.....
- 5.
.....



Ch. - 2

Festivals

Q.A Which national festivals are celebrated on :-

1. 15th August _____
2. 26th January _____
3. 2nd October _____

Q. B Fill In the blanks :-

1. We have a lot of fun during _____.
2. A sister ties _____ on the wrist of her brother.
3. At Holi, we apply _____ on each other's faces.
4. During the Pongal festival days, people cook special _____.
5. During Dussehra we burn the effigies of _____, Meghnatha and _____.
6. _____ marks the victory of good over evil.
7. Gujiya is made on _____.
8. On Christmas we celebrate the birthday of _____.

Q.C Complete the Pairs :

1. If Gujiya = Holi
Then Sewain = _____
2. If 26th January = National festival
Then Pongal = _____

Answer the following Questions :

Q 1. Why is India described as the land of festivals ?

Ans _____

Q 2. What is the main attraction of Republic Day.

Ans _____

Q 3. Describe the main festival of Tamil Nadu ?

Ans _____

Q 4. Which state of India celebrates Onam ?

Ans _____

Q 5. How do people celebrate Guruparb ?

Ans _____

Q 6. Name three National festivals of India ?

Ans _____

Remark _____ **T. Sign.**

Ch. - 3

Locating a Place

A) Fill in the blanks

Paper, cardinal, compass, display, east

1. We can find the book store with the help of _____ boards.
2. All ships and aircraft use magnetic _____ to find directions.
3. North, South, East and West are known as _____ directions.
4. The sun rises in the _____ direction.
5. A map is drawing of a place on _____.

B) Tick (✓) the correct options.

1. To locate a place, we should know its

a) direction	b) Map
c) both	d) none
2. Directions can be found with help of


a) a magnetic compass	b) the rising sun
c) a map	d) all of these
3. Amap is the drawing of a place on

a) a cloth	b) a paper
c) both	d) a road
4. Needle of the magnetic compass lies in


a) North-South direction	b) East-West direction
c) North-East direction	d) Any direction

Ch. - 3 Locating a Place

1. Label the directions correctly.



2. It is the sunrise view of a city. Observe the picture, tick (✓) the correct statements and cross (X) the incorrect ones.



- 1. The water tank is in the North direction.
- 2. The park is in the West direction.
- 3. The hospital is in the West direction.
- 4. The bank is in the South direction.
- 5. The Sun is rising in the East direction.

Remark _____

T. Sign.

Ch. - 3 Locating a Place

Q 1. What is a Map ?

Ans _____

Q 2. How is map helpful to us ?

Ans _____

Q 3. Write the names of four directions ?

Ans _____

Q 4. In which direction the sun rises ?

Ans _____

Q 5. In which direction the sun sets ?

Ans _____

Ch. - 4

Means of Transport

A. Fill In the blanks

Aeroplanes, metro, boat, trains, ships, water, long, hilly

1. _____ run on rails.
2. Trains are good and safe for traveling _____ distances.
3. In Kolkata and Delhi _____ train is used for local transport.
4. _____ sail on the sea.
5. A small ship is called a _____.
6. Ships and boats are means of _____ transport.
7. _____ are the fastest means of transport.
8. Mules and Ponies are used for transporting goods and people in _____ area.

B. Answer the following questions ?

Q 1. When do people use an aeroplane ?

Ans _____

Q2. How do people travel ?

Ans _____

Q3. Which animals are used as means of transport ?

Ans _____

Ch. - 4

Means of Transport

A) True or False

1. All vehicles are fast moving vehicles _____
2. Cycles do not need fuel to move. _____
3. Ships move on water. _____
4. Ponies are used in hilly areas. _____
5. A rocket can be used to reach the moon _____

B) Fill in the blanks

1. The wright brothers invented and flew the first _____.
2. Wheels help vehicles to _____.
3. An ambulance is a form of _____ transport.
4. Trains are used to travel _____ distance.
5. We board planes from an _____.

C) What type of transport am I ?

1. I move in the air when pulled by cables. _____
2. I am a type of fuel used to move vehicles. _____
3. I am a means of very fast air travel . _____
4. I am a type of fast underground rail. _____
5. I made travelling easy. _____

Ch. - 4

Means of Transport

Q. A Match the following

- | | |
|--------------------------------------|------------------------------|
| 1. Permanently built on the ground | a. cable car |
| 2. Petrol is needed for this to move | b. a type of water transport |
| 3. Pulled by cables | c. railway track |
| 4. Sailboat | d. connects city |
| 5. Metro | e. bus |

Q. B Tick (✓) the correct answers :-

1. Trucks are used for carrying **passengers / goods** from one place to another over long distances.
2. A railway track has rails permanently built on the **water / ground**.
3. Metro trains run in Indian cities of **Delhi and Kolkata / Pondicherry and Ahmedabad**.
4. A scooter needs **oxygen / petrol** to move.
5. The place from where we board an aeroplane is called an **airport / port**.

Q. C Write T for True and F for False

1. A yacht is a means of water transport.
2. Wheels help vehicles to move only on water.
3. Trains require coal or electricity to run.
4. Aeroplanes and helicopters are very slow modes of transport.
5. Bicycles and rickshaws do not need fuel to move.

Remark _____ T. Sign.

Ch. - 5

Seasons and Clothing

A) Fill in the blanks

1. Clothes are worn according to one's _____.
2. Astronauts wear _____ while _____ is worn while playing sports.
3. Clothes worn by people while going to work and to school are known as _____.
4. Traditional clothes used for performances are known as _____.
5. Cotton balls are _____ into cotton _____.

B) Tick the correct answers :-

1. Cotton threads are **spun / woven** into cotton clothes.
2. Fur is obtained by **shearing / sharing** the sheep.
3. Belts, shoes and bags are made of **lather / leather**.
4. Silk thread is obtained from the **cook / cocoon** of the silkworm.
5. A **needle / spindle** is used for spinning cotton ball into threads.

C) Give one word for the following :-

1. A ball of Wool _____
2. The object formed by the silkworm
which silk thread is obtained _____
3. Outfit of a ballerina _____

Ch. - 5**Seasons and Clothing****Q. A Give one word for following :-**

1. The season when flowers bloom the most _____
2. The season that causes floods at times _____
3. A short season that comes after monsoon _____
4. A drink we take hot during winter to keep ourselves warm

5. A natural condition that changes many times in a day.

Q.B Match the following :-**Column A****Column B**

- | | | |
|----------------------------------|-------|--------|
| 1. Lasts for around 2 - 3 months | _____ | summer |
| 2. Has five main seasons | _____ | spring |
| 3. Trees shed leaves | _____ | season |
| 4. New leaves appear | _____ | autumn |
| 5. Bright sunshine | _____ | India |

Q. C Who am I ? Read the clues and write correct answers :-

1. You wear me during summer. _____
2. I keep you cool during summer. _____
3. I keep you warm during winter. _____
4. If I am collected during monsoon, I am very useful. _____
5. I am the brightest during summer. _____

Ch. - 5

Seasons and Clothing

Q.1. What is season ?

Ans. _____

Q.2. What is special about the autumn season ?

Ans. _____

Q.3. Why does it become hot during summer ?

Ans. _____

Q.4. Why do farmers wait for the rain ?

Ans. _____

Q.5. How do we protect ourselves from heat in summer ?

Ans. _____

Q.6. How do we protect ourselves from cold in winter ?

Ans. _____

Ch. - 6

How Our Body Works

A) Write T for True and F for False

1. We have only the lungs inside our chest.
2. The brain controls all the organs of the body.
3. The heart sends blood to every part of the body.
4. It is the stomach that beats.
5. Our body moves with the help of bones.
6. Walking keeps our body fit and healthy.

B) Tick (✓) the correct answers :-

1. **Bones / Muscles** provide support to our body.
2. The sound made by our heart is known as **pumping / beating**.
3. We breathe with the help of our **nose / skin**.
4. The **heart / brain** helps us to think.
5. External organs are located **inside / outside** our body.

Ch. - 6

How Our Body Works

A. Fill in the blanks

(Stomach, machine, bone and muscles, breathe, eyes, heart, arms and legs, hands, brain, nose)

- 1) Our body is a living _____.
- 2) Our lungs help us to _____.
- 3) I play marbles with my _____.
- 4) I look around and cry with my _____.
- 5) I smell flowers with my _____.
- 6) I skip and run with my _____.
- 7) Organ that digests the food we eat. _____.
- 8) Our body is made up of _____ and _____.
- 9) The _____ controls all the organs of the body.
- 10) _____ is on the left side of our chest.

Q. B True or False

- | | |
|--|--------------------------|
| 1. External Organs can be seen. | <input type="checkbox"/> |
| 2. We must take care of our body. | <input type="checkbox"/> |
| 3. The brain helps us to think. | <input type="checkbox"/> |
| 4. The skin helps us to breathe. | <input type="checkbox"/> |
| 5. Our body is made up of bones and muscles. | <input type="checkbox"/> |
| 6. The lungs digest the food we eat. | <input type="checkbox"/> |

Ch. - 6

How Our Body Works

Answer the Following Questions :

Q 1. What is Posture ?

Ans: _____

Q 2. How are bones and muscles useful to us?

Ans: _____

Q 3. What does our heart do ?

Ans: _____

Q 4. Which internal organ helps us to think?

Ans: _____

Q 5. Name the organ that digest the food we eat ?

Ans: _____

Q 6. Name two internal organs of the body.

Ans: _____

Q 7. Name two external organs of the body.




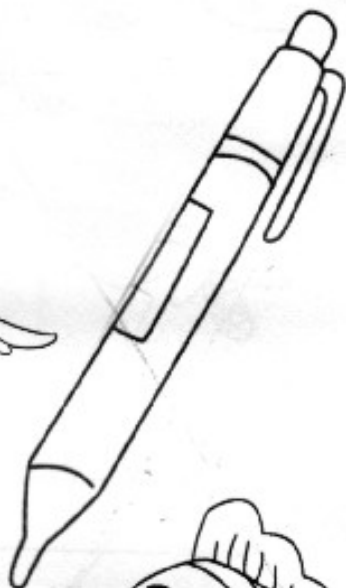
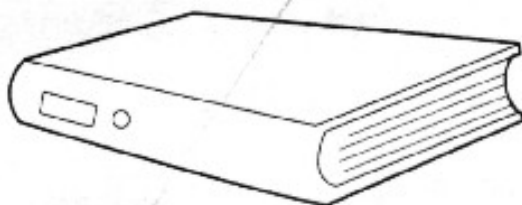
Ans: 1. _____
2. _____

Remark _____ **T. Sign.**

Ch. - 7

Natural and Human Made Things

Colour the living things in the following :



Ch. - 7**Natural and Human Made Things****A) Tick (✓) the correct options.**

- Which of the following is a living things ?

a) Car	<input type="checkbox"/>	b) Pencil	<input type="checkbox"/>
c) Plant	<input type="checkbox"/>	d) Toy	<input type="checkbox"/>
- Which of the following is a characteristic of non-living things ?

a) They grow	<input type="checkbox"/>	b) They breathe	<input type="checkbox"/>
c) They eat food	<input type="checkbox"/>	d) They do not move	<input type="checkbox"/>
- Which of the following things need food ?

a) Mountain	<input type="checkbox"/>	b) Bird	<input type="checkbox"/>
c) Football	<input type="checkbox"/>	d) Bag	<input type="checkbox"/>
- Which of the following things cannot feel ?

a) Boy	<input type="checkbox"/>	b) Building	<input type="checkbox"/>
c) Animals	<input type="checkbox"/>	d) Fish	<input type="checkbox"/>

B. Write (T) for true statements and (F) for false statements.

- A cat does not produce baby.
- Plants do not breathe.
- Birds and animals are living things.
- Tables and chairs are non-living things.
- A lion is a living thing.
- Living things can change and grow.

C. Fill In the blanks with the help of the words given in the brackets.

- Roads, buildings, cars and pencils are things.
(non-living/living)
- All plants and are living things. (animals/books)
- need food. (living things/non-living things)

D. Give two examples for each of the following.

- Living things
- non-living things

Remark _____ T. Sign.

Ch. - 8

Changes Around Us

A) With the help of given pictures as clues. Fill in the missing letters.

1. The source of heat and light on the Earth.



S		
---	--	--

2. It moves around the Earth.



M			
---	--	--	--

3. It is a huge ball of gases.



S			
---	--	--	--

4. Place where we live.



E				
---	--	--	--	--

5. It is seen after the rain.



R					B		
---	--	--	--	--	---	--	--

B. Match the following.

1. The sun rises

a) shines at night.

2. A rainy day has

b) in the morning.

3. The stars

c) dark clouds.


4. The Moon

d) in the evening.

5. The Sun sets

e) twinkle at night.

C. Colour the pictures of the day and night sky.



Ch. - 8

Changes Around Us

A) Tick (✓) the correct answer :

1. We drink cold water many times on a _____ day.
 a) cold b) hot c) rainy
2. We use blankets and quilts on a _____ day.
 a) cold b) hot c) rainy
3. A rainbow has _____ colours.
 a) Six b) Seven c) eight

B. Fill In the blanks with the words given in the box :

1. Weather on a hot day is _____.
2. Cotton clothes absorb _____.
3. During rains, there are dark _____ in the sky.
4. Children love to _____ paper-boats on a rainy day.

sail
warm
sweat
clouds

C. Write 'True' or 'False' :

1. We wear clothes according to the weather. _____
2. We wear woollen clothes on a hot day. _____
3. Cotton clothes keep our body warm. _____
4. Wind makes a hot day hotter. _____

D. Answer the following questions in one or two words :

1. When do you wear cotton clothes ? _____
2. When do we see a rainbow ? _____
3. What do we use to protect our body from rain ? _____

Ch. - 8

Changes Around Us

A) Tick (✓) the correct answer :

1. Which of the following is biggest ?

a) sun b) moon c) earth

2. Which of the following has its own light ?

a) moon b) earth c) sun

3. There are millions of _____ in the sky.

a) sun b) stars c) moon

B. Fill in the blanks with the words given in the box :

1. The sun gives us heat and _____.

2. The _____ are very far away from us.

3. The _____ moves a round the sun.

4. The moon is _____ in shape.

earth
 round
 light
 stars

C. Write 'T' for True or 'F' for False statement :

1. The sun is many times bigger than the earth.

2. The moon has air and water.

3. There are millions of stars in the sky.

4. Plants are man-made things.

D. Answer the following questions.

Q. 1 What does the sun give us ?

Ans. : _____

Q. 2 What is the shape of the moon ?

Ans. : _____

Q. 3 What are the things made by man called ?

Ans. : _____

Remark _____

T. Sign.

Ch. - 9

Our Earth

A. Fill in the blanks

round, globe, plain, deserts, home, mount everest, air, mountains

1. The earth is our _____.
2. The shape of our earth is _____.
3. A model of the earth is called a _____.
4. _____ covers the earth like a blanket.
5. Flat land is called a _____.
6. _____ is the highest mountain Peak in the world.
7. Very high hills are called _____.
8. Sandy lands are called _____.

We all live on the Earth. It is the only known planet where life exist.

B. The Earth doesn't look same everywhere. Fill in the blanks to complete the names of these land forms. First has been done for you.



M O U N T A I N



H I L L




V A L L E Y



R E E F



P L A I N



I S L A N D

Remark _____ T. Sign.

Ch. - 9

Our Earth

Answer the following questions

Q 1. What is a Globe ?

Ans _____

Q 2. What is the shape of earth ?

Ans _____

Q 3. What is a desert ?

Ans _____

Q 4. What is the Earth made up of ?

Ans _____

Q 5. How are the mountains different from the hills ?

Ans _____

Q 6. What is an island ?

Ans _____

Q 7. How do the rivers flow into ?

Ans _____

Remark _____ T. Sign.

Ch. - 9

Our Earth

Q. A Fill in the blanks.

1. The shape of the Earth is similar to the fruit _____
2. The shape of a hill is like that of a _____
3. Cactus Plants can grow in _____ area.
4. _____ is a land body that is surrounded by water on all sides.
5. A dry area covered by sand _____
6. A flat area of land where most people live _____.
7. Low land lying between two mountains _____.
8. Cone like land forms that are shorter than mountains _____.
9. A model of the Earth is called a _____.
10. An _____ is a very large body of water.

Ch. - 9

Our Earth

Q. A Put (✓) for true (X) for false.

- a. The earth is round like a ball
- b. There is more land covering the Earth than water.
- c. Hills are cooler than plains.
- d. We cannot use sea water for drinking.
- e. We can feel air when it moves.

Q. B Fill in the blanks.

- a. Flat land is called _____.
- b. Tops of high mountains are covered with _____.
- c. A _____ is the land between two hills or mountains.
- d. Water is cleaned in the _____ before supplying to our homes.
- e. Moving air is called _____.

Ch. - 10

A Clean World

A) Tick (✓) the correct options.

1. Dirty air contains :

- | | | | |
|------------------|--------------------------|-----------------|--------------------------|
| a) dust | <input type="checkbox"/> | b) smoke | <input type="checkbox"/> |
| c) harmful gases | <input type="checkbox"/> | d) all of these | <input type="checkbox"/> |

2. Water on the Earth hasn't finished till now because of :

- | | | | |
|------------------|--------------------------|-------------------|--------------------------|
| a) water cycle | <input type="checkbox"/> | b) water scarcity | <input type="checkbox"/> |
| c) water wastage | <input type="checkbox"/> | d) flood | <input type="checkbox"/> |

3. We can save water by :

- | | | | |
|---------------------|--------------------------|------------------|--------------------------|
| a) reusing it | <input type="checkbox"/> | b) wasting it | <input type="checkbox"/> |
| c) both (a) and (b) | <input type="checkbox"/> | d) none of these | <input type="checkbox"/> |

4. is the main source of water.

- | | | | |
|--------------|--------------------------|--------------|--------------------------|
| a) rain | <input type="checkbox"/> | b) tube well | <input type="checkbox"/> |
| c) hand pump | <input type="checkbox"/> | d) pond | <input type="checkbox"/> |

B. Fill in the blanks with correct words. You can use those in the help box.

gaseous, bodies, liquid, clouds, cycle, rain

During water cycle, water is in form that changes into form due to sunlight. The water vapours form that change into when it cools down. The rainwater mixes into water and thus a water completes.

Ch. - 10

A Clean World

Fill in the blanks using words in clue box.

Clue Box : Polluted, breathe, damage, plant, cycle, walk, unpleasant, factories, loud, vehicles, public, garbage, paper

1. Throw _____ in dustbins.
2. Use _____ bags instead of plastic bags.
3. We should use _____ transport such as a bus.
4. _____ and _____ give out smoke that pollutes air.
5. _____ and _____ sounds cause noise pollution.
6. We should _____ more trees.
7. Use _____ or _____ to places that are nearby.
8. Loud noise can _____ our hearing.
9. We may fall sick if we _____ in polluted air.
10. Dirty water is _____ water.

Ch. - 10

A Clean World

Answer the following questions

Q 1. Why should we grow more trees ?

Ans _____

Q2. What pollute the air ?

Ans _____

Q3. Name the three types of pollution.

Ans _____

Q4. What happens when we breath in polluted air ?

Ans _____

Q5. List two ways by which we can keep our earth clean ?

Ans _____

Q6. Why should we use public transport ?

Ans _____

Remark _____ T. Sign.

Ch. - 11

Our Nation

A) Fill In the blanks.

Asiatic Lions, Patriotism, Jana, Gana-Mana, Vande Matram

1. National Symbols prompt
2. The three are embedded in our National Emblem.
3. is our National Anthem, and is our National Song.

B. Name the colours of our National Flag and also write their significance.

Colour

Significance

- 1.
- 2.
- 3.

C. Draw National Flag

Ch. - 11

Our Nation

1. Identify the following national symbols and name them.



.....

2. Join the dots and colour the animal. Then, fill in the blanks with the correct information.



It is a It is the National of India.

It stands for

.....

Remark _____

T. Sign.

Ch. - 11

Our Nation

Answer the following questions

Q 1. What are national symbols ?

Ans _____

Q 2. Name any four National Symbols of India ?

Ans _____

Q 3. Name national festival of India, Why are they important ?

Ans _____

Q 4. What is the meaning of national emblem ?

Ans _____

Q 5. Which words are written on national emblem ?

Ans _____

Q 6. What lies in the centre of national flag ?

Ans _____

Remark _____ T. Sign.